

Write four different facts.

9

2 7

| | | | | |
|----------------------|---|----------------------|---|----------------------|
| <input type="text"/> | + | <input type="text"/> | = | <input type="text"/> |
| <input type="text"/> | + | <input type="text"/> | = | <input type="text"/> |
| <input type="text"/> | - | <input type="text"/> | = | <input type="text"/> |
| <input type="text"/> | - | <input type="text"/> | = | <input type="text"/> |

7

3 4

| | | | | |
|----------------------|---|----------------------|---|----------------------|
| <input type="text"/> | + | <input type="text"/> | = | <input type="text"/> |
| <input type="text"/> | + | <input type="text"/> | = | <input type="text"/> |
| <input type="text"/> | - | <input type="text"/> | = | <input type="text"/> |
| <input type="text"/> | - | <input type="text"/> | = | <input type="text"/> |

8

6 2

| | | | | |
|----------------------|---|----------------------|---|----------------------|
| <input type="text"/> | + | <input type="text"/> | = | <input type="text"/> |
| <input type="text"/> | + | <input type="text"/> | = | <input type="text"/> |
| <input type="text"/> | - | <input type="text"/> | = | <input type="text"/> |
| <input type="text"/> | - | <input type="text"/> | = | <input type="text"/> |

6

5 1

| | | | | |
|----------------------|---|----------------------|---|----------------------|
| <input type="text"/> | + | <input type="text"/> | = | <input type="text"/> |
| <input type="text"/> | + | <input type="text"/> | = | <input type="text"/> |
| <input type="text"/> | - | <input type="text"/> | = | <input type="text"/> |
| <input type="text"/> | - | <input type="text"/> | = | <input type="text"/> |

Write four different facts.

12

8 4

| | | | | |
|----------------------|---|----------------------|---|----------------------|
| <input type="text"/> | + | <input type="text"/> | = | <input type="text"/> |
| <input type="text"/> | + | <input type="text"/> | = | <input type="text"/> |
| <input type="text"/> | - | <input type="text"/> | = | <input type="text"/> |
| <input type="text"/> | - | <input type="text"/> | = | <input type="text"/> |

14

9 5

| | | | | |
|----------------------|---|----------------------|---|----------------------|
| <input type="text"/> | + | <input type="text"/> | = | <input type="text"/> |
| <input type="text"/> | + | <input type="text"/> | = | <input type="text"/> |
| <input type="text"/> | - | <input type="text"/> | = | <input type="text"/> |
| <input type="text"/> | - | <input type="text"/> | = | <input type="text"/> |

13

7 6

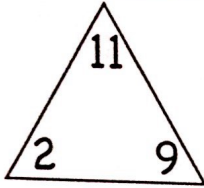
| | | | | |
|----------------------|---|----------------------|---|----------------------|
| <input type="text"/> | + | <input type="text"/> | = | <input type="text"/> |
| <input type="text"/> | + | <input type="text"/> | = | <input type="text"/> |
| <input type="text"/> | - | <input type="text"/> | = | <input type="text"/> |
| <input type="text"/> | - | <input type="text"/> | = | <input type="text"/> |

15

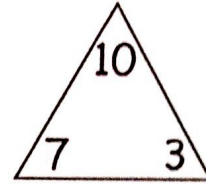
6 9

| | | | | |
|----------------------|---|----------------------|---|----------------------|
| <input type="text"/> | + | <input type="text"/> | = | <input type="text"/> |
| <input type="text"/> | + | <input type="text"/> | = | <input type="text"/> |
| <input type="text"/> | - | <input type="text"/> | = | <input type="text"/> |
| <input type="text"/> | - | <input type="text"/> | = | <input type="text"/> |

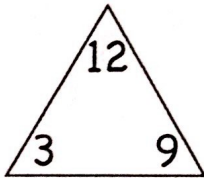
Write four different facts.



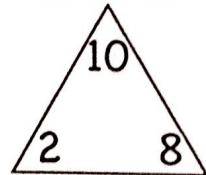
$$\square + \square = \square$$
$$\square + \square = \square$$
$$\square - \square = \square$$
$$\square - \square = \square$$



$$\square + \square = \square$$
$$\square + \square = \square$$
$$\square - \square = \square$$
$$\square - \square = \square$$

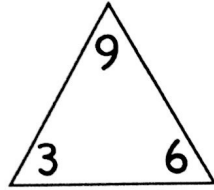


$$\square + \square = \square$$
$$\square + \square = \square$$
$$\square - \square = \square$$
$$\square - \square = \square$$



$$\square + \square = \square$$
$$\square + \square = \square$$
$$\square - \square = \square$$
$$\square - \square = \square$$

Write four different facts.

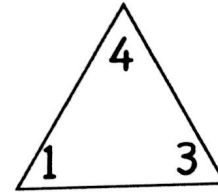


$$\square + \square = \square$$

$$\square + \square = \square$$

$$\square - \square = \square$$

$$\square - \square = \square$$

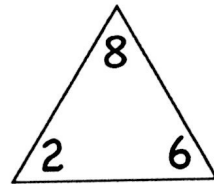


$$\square + \square = \square$$

$$\square + \square = \square$$

$$\square - \square = \square$$

$$\square - \square = \square$$

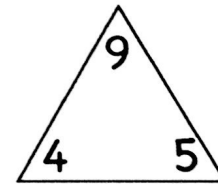


$$\square + \square = \square$$

$$\square + \square = \square$$

$$\square - \square = \square$$

$$\square - \square = \square$$



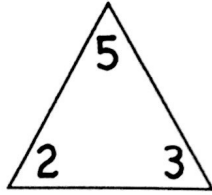
$$\square + \square = \square$$

$$\square + \square = \square$$

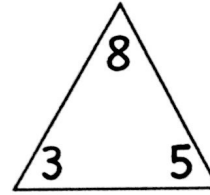
$$\square - \square = \square$$

$$\square - \square = \square$$

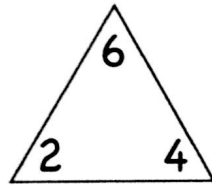
Write four different facts.



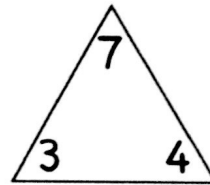
$$\square + \square = \square$$
$$\square + \square = \square$$
$$\square - \square = \square$$
$$\square - \square = \square$$



$$\square + \square = \square$$
$$\square + \square = \square$$
$$\square - \square = \square$$
$$\square - \square = \square$$



$$\square + \square = \square$$
$$\square + \square = \square$$
$$\square - \square = \square$$
$$\square - \square = \square$$



$$\square + \square = \square$$
$$\square + \square = \square$$
$$\square - \square = \square$$
$$\square - \square = \square$$

A

Name _____

Date _____



*Count On to Add

| | | | | | |
|----|---------|--|----|---------|--|
| 1 | $1 + 1$ | | 16 | $4 + 3$ | |
| 2 | $2 + 1$ | | 17 | $3 + 3$ | |
| 3 | $3 + 1$ | | 18 | $4 + 3$ | |
| 4 | $3 + 2$ | | 19 | $3 + 4$ | |
| 5 | $2 + 2$ | | 20 | $2 + 4$ | |
| 6 | $3 + 2$ | | 21 | $4 + 2$ | |
| 7 | $2 + 2$ | | 22 | $5 + 2$ | |
| 8 | $3 + 0$ | | 23 | $2 + 5$ | |
| 9 | $3 + 1$ | | 24 | $2 + 6$ | |
| 10 | $3 + 2$ | | 25 | $6 + 3$ | |
| 11 | $5 + 2$ | | 26 | $3 + 6$ | |
| 12 | $5 + 3$ | | 27 | $2 + 7$ | |
| 13 | $5 + 2$ | | 28 | $3 + 7$ | |
| 14 | $5 + 3$ | | 29 | $2 + 8$ | |
| 15 | $6 + 3$ | | 30 | $3 + 6$ | |

Number correct: 

A

Name _____

Date _____

*Count on to add.

| | | | | | |
|----|------------------------|--|----|------------------------|--|
| 1 | 1 + 1 ● ● | | 16 | 4 + 3 ●●●● ●●● | |
| 2 | 2 + 1 ●● ● | | 17 | 5 + 3 ●●●●● ●●● | |
| 3 | 3 + 1 ●●● ● | | 18 | 7 + 3 ●●●●●●● ●●● | |
| 4 | 3 + 2 ●●● ●● | | 19 | 7 + 2 ●●●●●●● ●● | |
| 5 | 1 + 2 ● ●● | | 20 | 8 + 2 ●●●●●●●● ●● | |
| 6 | 2 + 2 ●● ●● | | 21 | 6 + 2 ●●●●●● ●● | |
| 7 | 2 + 3 ●● ●●● | | 22 | 6 + 1 ●●●●●● ● | |
| 8 | 2 + 1 ●● ● | | 23 | 6 + 1 | |
| 9 | 2 + 2 ●● ●● | | 24 | 6 + 2 | |
| 10 | 3 + 2 ●●● ●● | | 25 | 7 + 2 | |
| 11 | 5 + 2 ●●●●● ●● | | 26 | 8 + 2 | |
| 12 | 8 + 2 ●●●●●●●● ●● | | 27 | 2 + 8 | |
| 13 | 8 + 1 ●●●●●●●● ● | | 28 | 2 + 6 | |
| 14 | 7 + 1 ●●●●●●● ● | | 29 | 3 + 6 | |
| 15 | 9 + 1 ●●●●●●●●● ● | | 30 | 4 + 5 | |































B

Number correct: 

Name _____


Date _____

*Write the number of dots. Find 1 or 2 groups that make finding the total number of dots easier!

| | | | | | |
|----|---|--|----|---|--|
| 1 |  | | 16 |  | |
| 2 |  | | 17 |  | |
| 3 |  | | 18 |  | |
| 4 |  | | 19 |  | |
| 5 |  | | 20 |  | |
| 6 |  | | 21 |  | |
| 7 |  | | 22 |  | |
| 8 |  | | 23 |  | |
| 9 |  | | 24 |  | |
| 10 |  | | 25 |  | |
| 11 |  | | 26 |  | |
| 12 |  | | 27 |  | |
| 13 |  | | 28 |  | |
| 14 |  | | 29 |  | |
| 15 |  | | 30 |  | |

*Write the number of dots. Find 1 or 2 groups that make finding the total number of dots easier

| | | | | | |
|----|--|--|----|--|--|
| 1 | | | 16 | | |
| 2 | | | 17 | | |
| 3 | | | 18 | | |
| 4 | | | 19 | | |
| 5 | | | 20 | | |
| 6 | | | 21 | | |
| 7 | | | 22 | | |
| 8 | | | 23 | | |
| 9 | | | 24 | | |
| 10 | | | 25 | | |
| 11 | | | 26 | | |
| 12 | | | 27 | | |
| 13 | | | 28 | | |
| 14 | | | 29 | | |
| 15 | | | 30 | | |





















Number correct: 

A

Name _____

Date _____

*Write the number that is 1 more.

| | | | | | |
|----|---|--|----|---|--|
| 1 |  | | 16 |  | |
| 2 |  | | 17 | 9 | |
| 3 |  | | 18 | 7 | |
| 4 |  | | 19 |  | |
| 5 |  | | 20 | 8 | |
| 6 |  | | 21 | 7 | |
| 7 |  | | 22 |  | |
| 8 | 5 | | 23 |  | |
| 9 |  | | 24 | 10 | |
| 10 | 6 | | 25 |  | |
| 11 |  | | 26 |  | |
| 12 | 7 | | 27 |  | |
| 13 |  | | 28 | 9 | |
| 14 |  | | 29 |  | |
| 15 | 8 | | 30 |  | |